

# Soek jy 'n fantastiese tutor?

[www.teachme2.com/matriek](http://www.teachme2.com/matriek)





# basic education

Department:  
Basic Education  
**REPUBLIC OF SOUTH AFRICA**

## **NASIONALE SENIOR SERTIFIKAAT**

**GRAAD 12**

**WISKUNDIGE GELETTERHEID V2**

**ADDENDUM**

**NOVEMBER 2022**

**Hierdie addendum bestaan uit 6 bladsye met 5 bylaes.**

BYLAE A

VRAAG 2.1

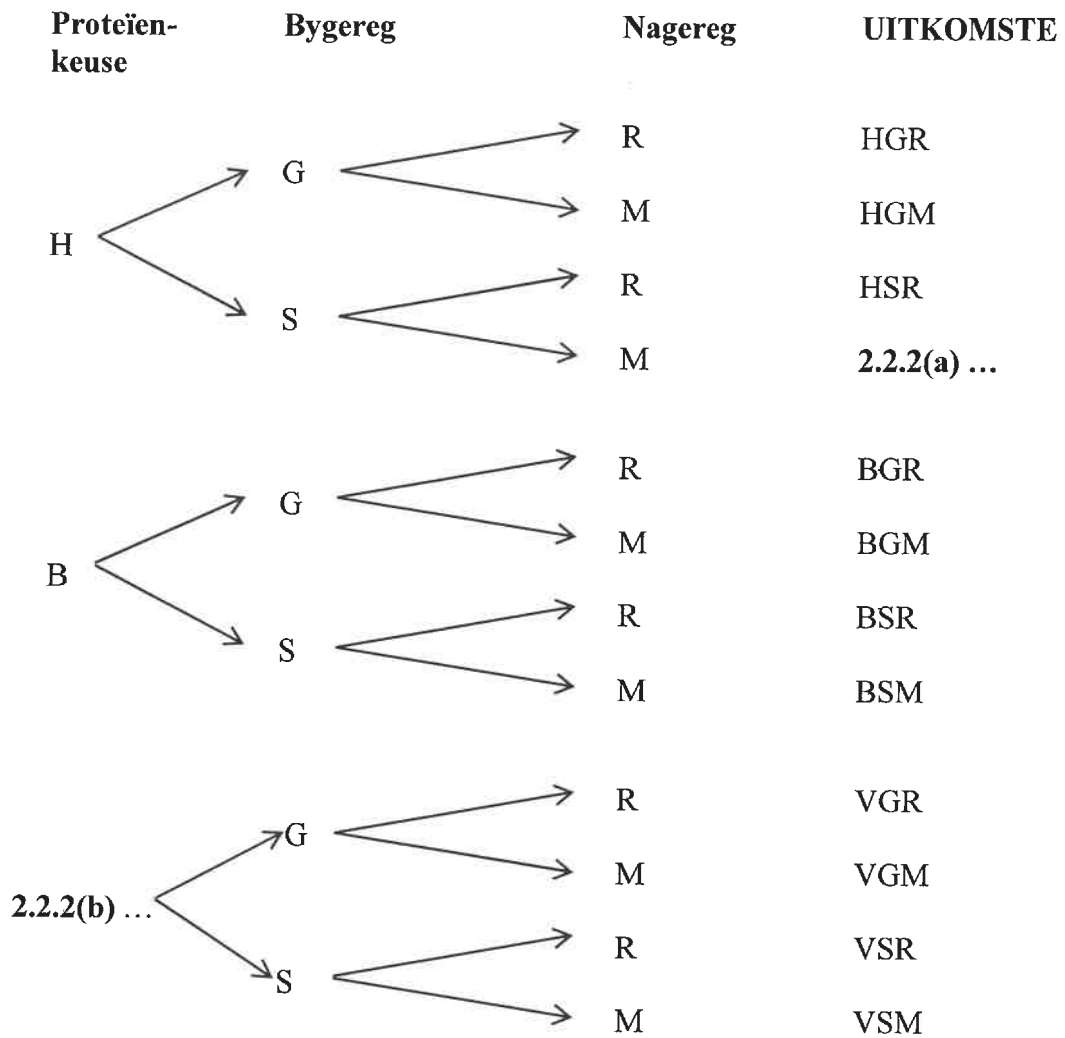
SITPLEKPLAN VAN DIE RESTAURANT

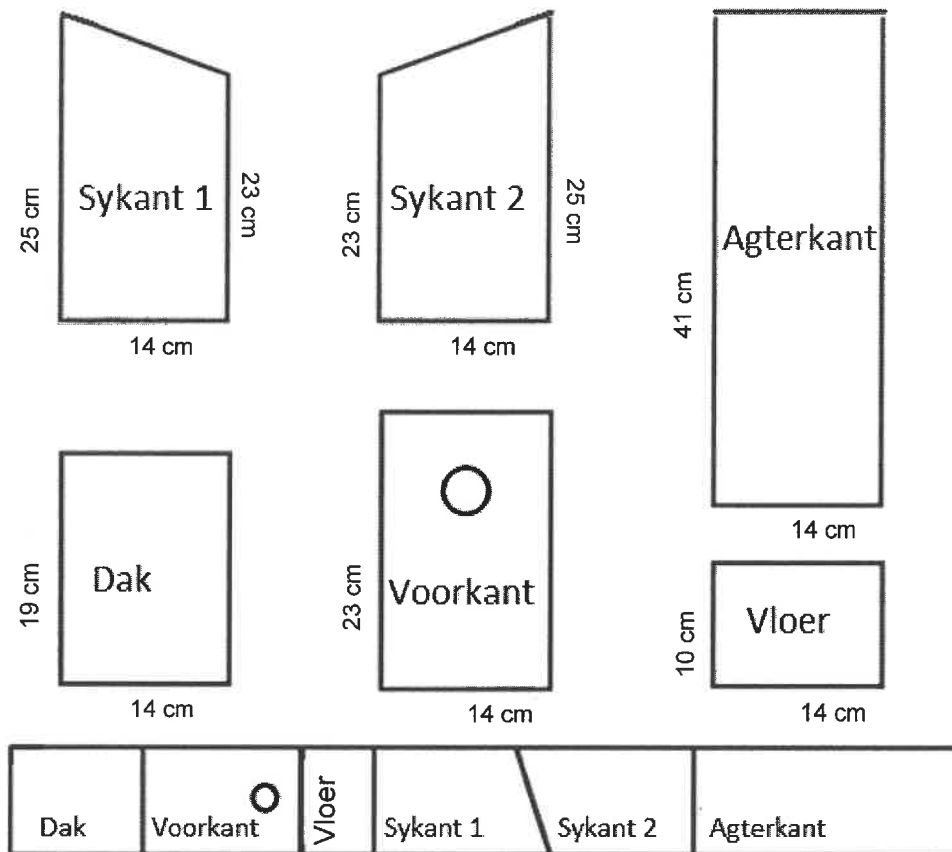
SLEUTEL	
Vensters	
Klein	
Medium	
Stoel vir 1	
Bank	
Onderdak-stoep	

The floor plan shows a rectangular restaurant layout. At the top is the kitchen (Kombuis) with a sink and stove, and a storage room (Stoorkamer) with a door leading to the back rooms (Ruskamers). A central area contains a door leading to an outdoor seating area (Deur na onderdak-stoep). The main dining area is filled with tables: 19, 20, and 21 are diamond-shaped tables near the top wall; 7, 8, 9, and 10 are diamond-shaped tables in the center; 11, 12, 14, 15, and 16 are square tables along the right wall; 17 and 18 are square tables near the kitchen; and 1, 2, 3, 4, 5, and 6 are square tables along the bottom wall. A main entrance (Hoofingang/-uitgang) is located on the right wall, with a bank and stools nearby. Arrows indicate the direction of traffic flow from the entrance towards the back of the restaurant.


**LET WEL:** Die hoofingangdeure is aan die suidekant van die gebou.

[Aangepas uit [www.bing.com](http://www.bing.com)]

**BYLAE B****VRAAG 2.2****KEUSES VANAF 'N VASGESTELDE SPYSKAART BY DIE RESTAURANT**

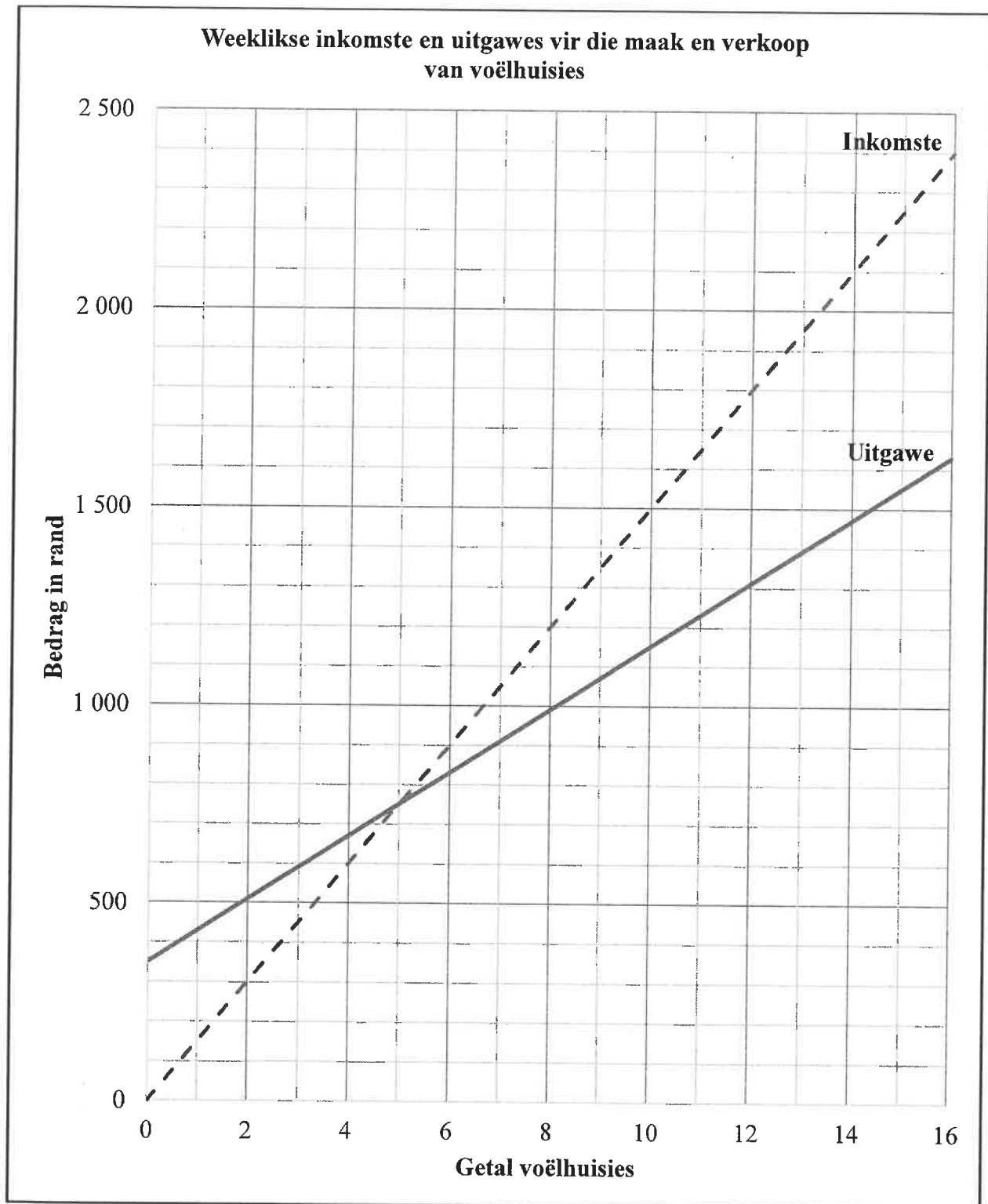
**BYLAE C****VRAAG 4.1****DIAGRAM VAN DIE DELE VAN 'N VOËLHUISIE**[Aangepas uit [www.SunCatcherStudio.com](http://www.SunCatcherStudio.com)]**INSTRUKSIES VIR DIE AANMEKAARSIT VAN DIE VOËLHUISIE**

STAP	WAT OM TE DOEN
1	Slaan die lang kante van sykant 1 en sykant 2 aan die agterkant met spykers vas.
2	Posisioneer die vloer tussen die twee sykante en slaan dit met spykers vas.
3	Slaan die voorkant aan die twee sykante en die vloer met spykers vas.
4	Plaas die dak in posisie en slaan dit met spykers vas.

**EINDPRODUK**

## BYLAE D

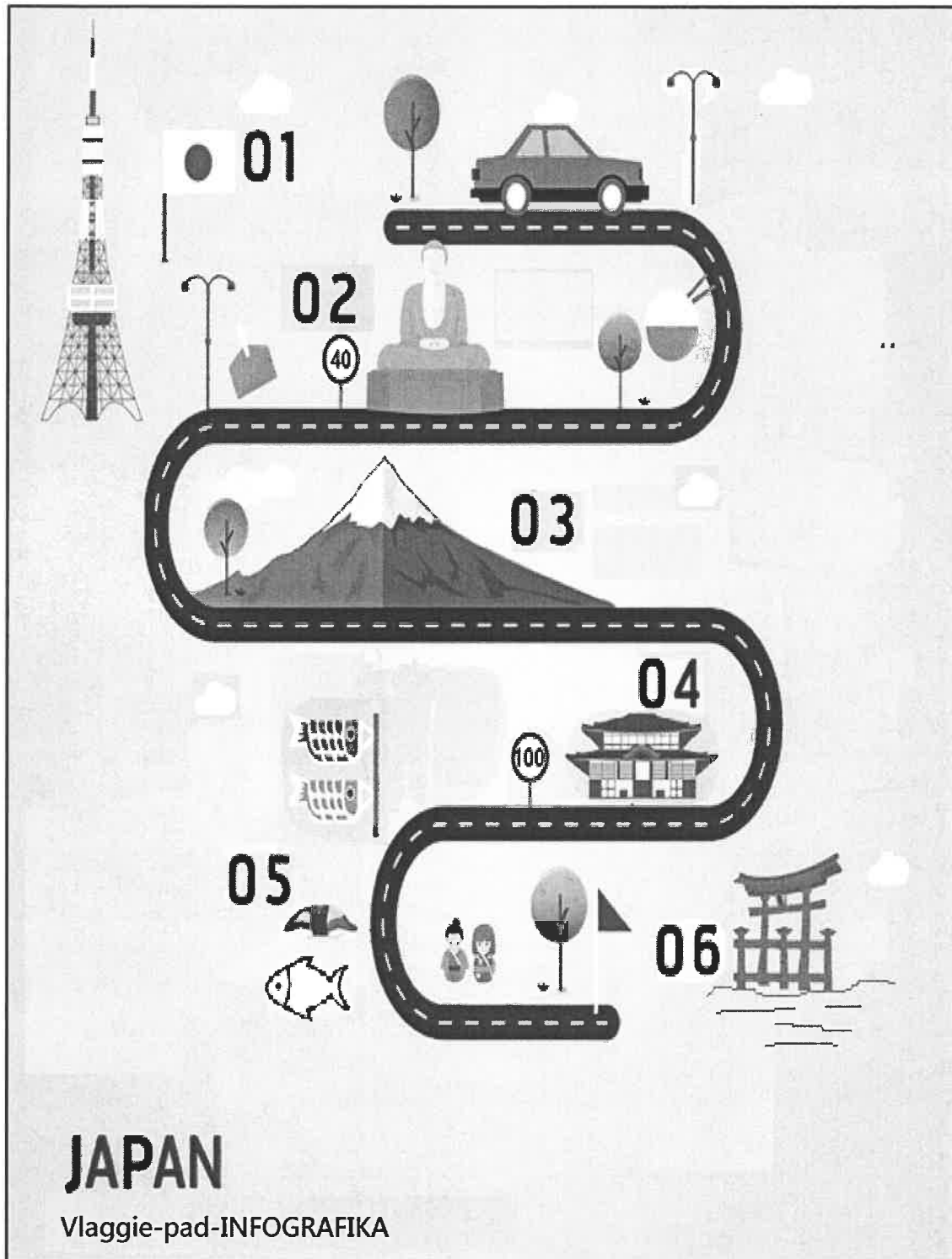
## VRAAG 4.3



BYLAE E

VRAAG 5.1

PAD-INFOGRAFIKA VAN JAPAN WAT BESONDERHEDE VAN  
TOERISTEPLEKKE TOON



[Aangepas uit [Vectorstock.com](http://Vectorstock.com)]