

# Need an amazing tutor?

[www.teachme2.com/matric](http://www.teachme2.com/matric)



Collected and collated by

**teachme2**



# basic education

Department:  
Basic Education  
**REPUBLIC OF SOUTH AFRICA**

## NATIONAL SENIOR CERTIFICATE

**GRADE 12**

**MATHEMATICAL LITERACY P2**

**ADDENDUM**

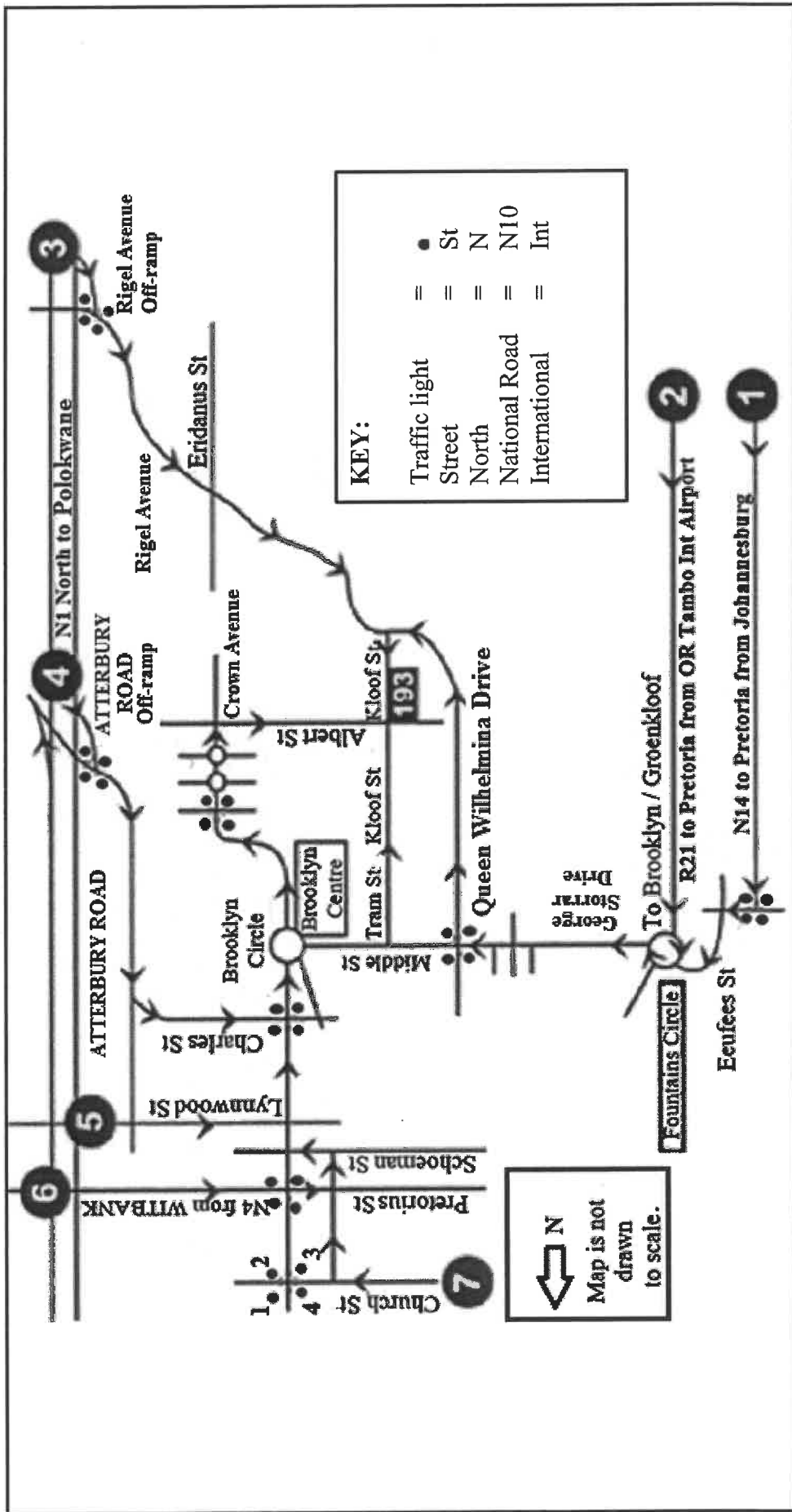
**NOVEMBER 2023**

**This addendum consists of 5 pages with 4 annexures.**

# ANNEXURE A

## QUESTION 2.3

### PRETORIA HOTEL 193 – ROAD MAP AND AREA INFORMATION

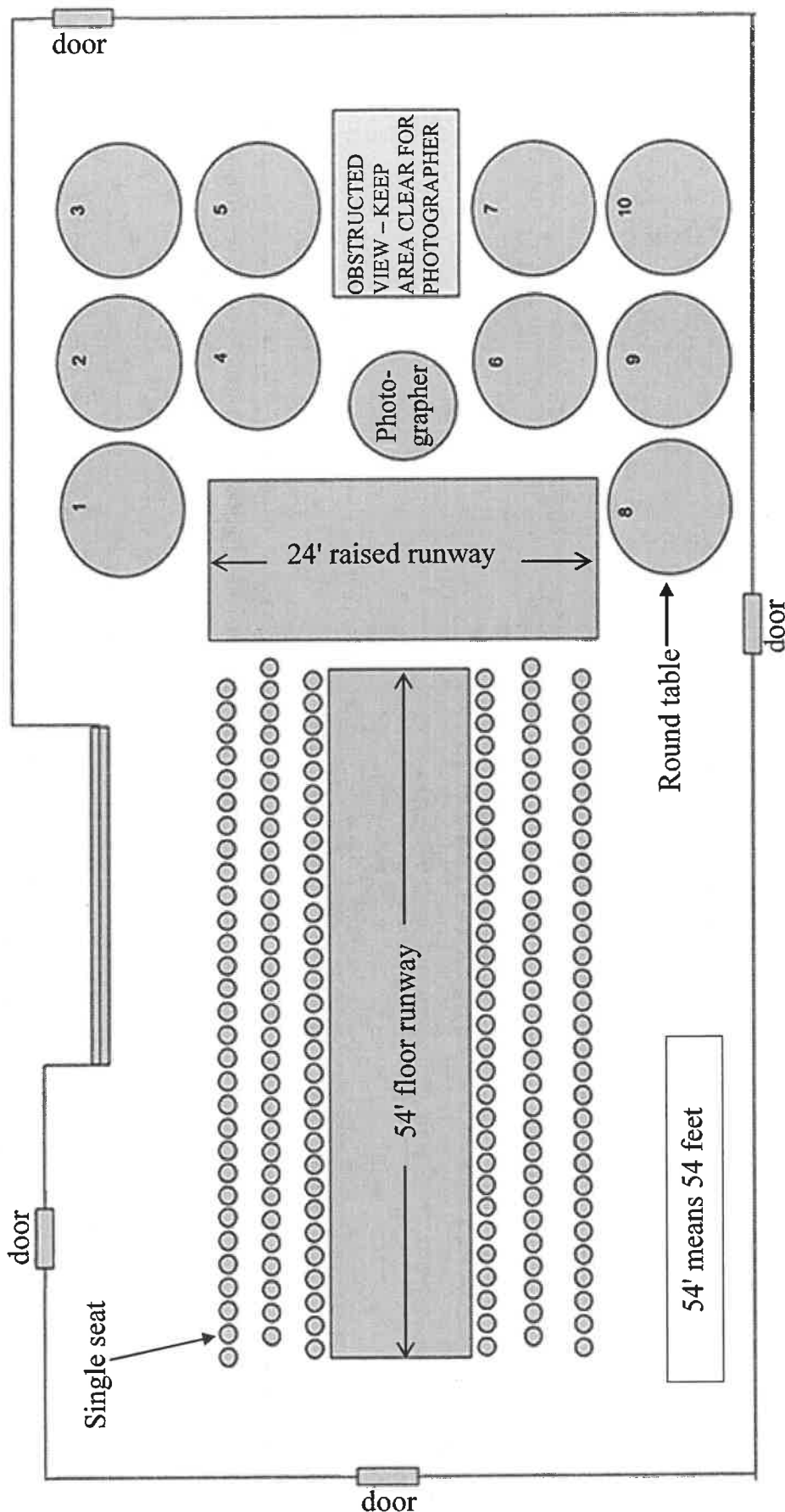


[Source: [www.cricklewood.co.za](http://www.cricklewood.co.za)]

# ANNEXURE B

## QUESTION 4.1

### LAYOUT OF THE RUNWAYS AND THE SEATING ARRANGEMENTS AT A FASHION SHOW



[Adapted from <https://fearlessfocusprogram.com/celebration-fashion-show-tickets/>]

## ANNEXURE C

## QUESTION 4.2

TABLE 1: BODY TYPE CHART USED TO SELECT DRESS SIZE

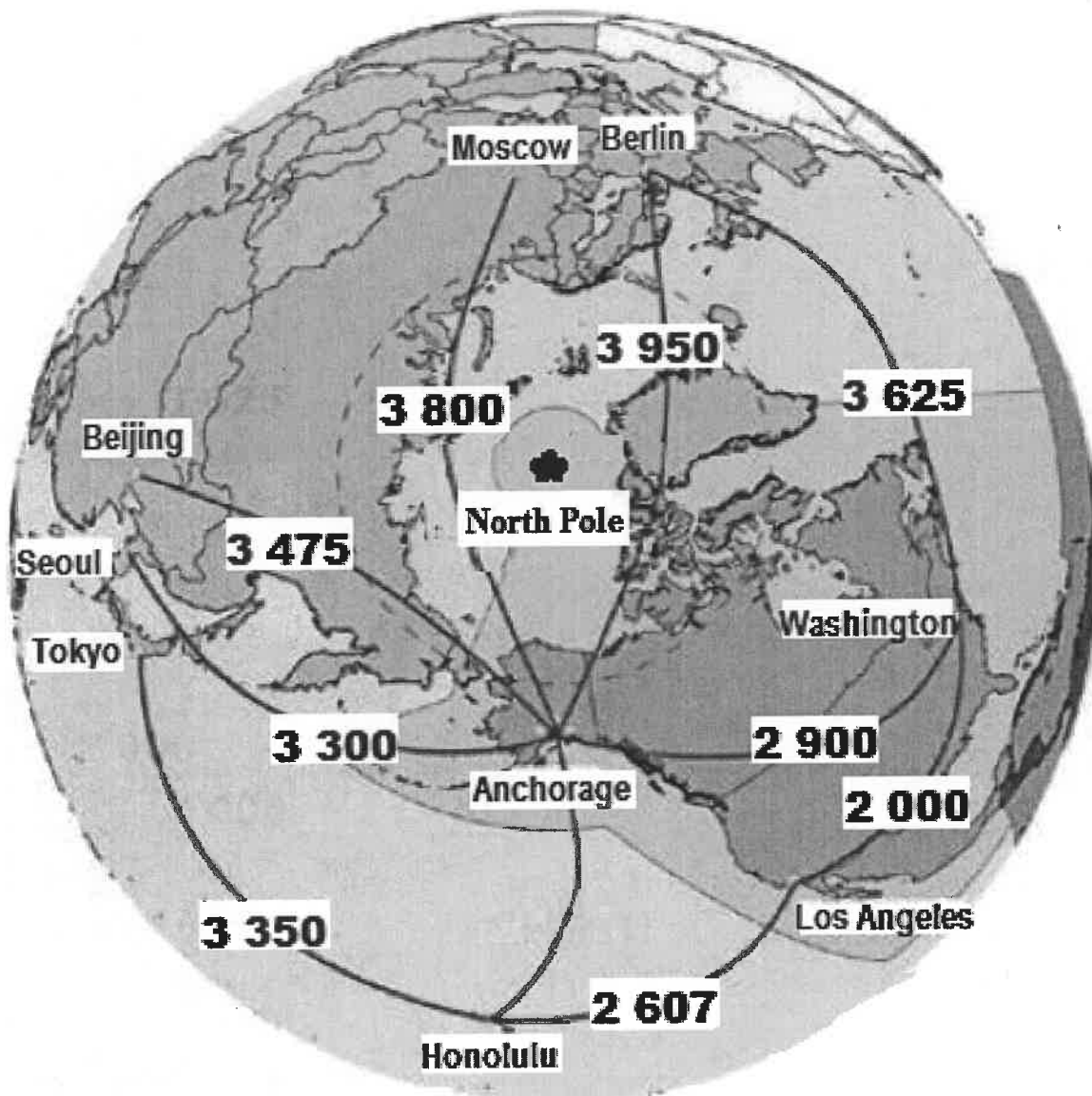
BODY TYPE CHART												
Mass	→	50 kg	55 kg	60 kg	65 kg	67 kg	70 kg	75 kg	80 kg	85 kg	90 kg	100 kg
Height	↓											
1,50 m		XS	S	S	M	L	L	XL	XL	XL	XL	XXL
1,55 m		XS	XS	S	M	M	L	L	XL	XL	XL	XXL
1,60 m		XS	XS	S	S	M	L	L	L	XL	XL	XXL
1,65 m		XS	XS	S	S	M	L	L	L	XL	XL	XXL
1,70 m		XS	XS	S	S	M	M	L	L	XL	XL	XXL
1,75 m		XS	XS	XS	S	S	M	M	L	XL	XL	XXL
Dress size		0-2	2-4	4-6	6-8	8-10	10-12	12-14	14-16	16-18	18-20	20-22
Body size		XS	XS	S	S	M	M	M	L	L	XL	XXL

[Adapted from <https://cmmodels.com/model-measurements-for-catwalks-and-fashion-shows/>]

## ANNEXURE D

## QUESTION 5.3

**PART OF THE GLOBE INDICATING THE SHORTEST DISTANCES, IN NAUTICAL MILES, BETWEEN ANCHORAGE AND A FEW SELECTED CITIES IN THE WORLD**



[Adapted from [anchorage.net](http://anchorage.net)]