

Need an amazing tutor?

www.teachme2.com/matric



Collected and collated by

teachme2



basic education

Department:
Basic Education
REPUBLIC OF SOUTH AFRICA

SENIOR CERTIFICATE/ NATIONAL SENIOR CERTIFICATE

GRADE 12

MATHEMATICAL LITERACY P2

ADDENDUM

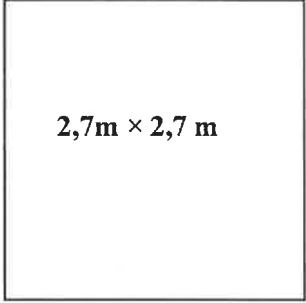
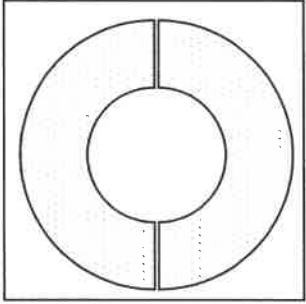
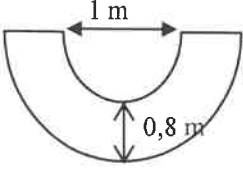
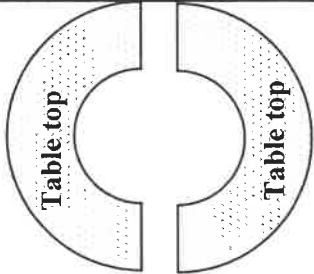
NOVEMBER 2020

This addendum consists of 5 pages with 4 annexures.

ANNEXURE A**QUESTION 2.1****TABLE 2: MARKING TEAM, HOURS WORKED, TARIFFS AND AMOUNT CLAIMED FOR MARKING AND MODERATION**

	NUMBER OF PERSONS	HOURS WORKED PER PERSON	TARIFF (R/hr)	AMOUNT (R) CLAIMED PER PERSON
Chief moderator (CM)	1	79	244,35	...
Internal moderator (IM)	1	79	244,35	...
Senior moderator	5	A	211,75	13 763,75
Markers	23	52	195,50	10 166,00
TOTAL	30	-

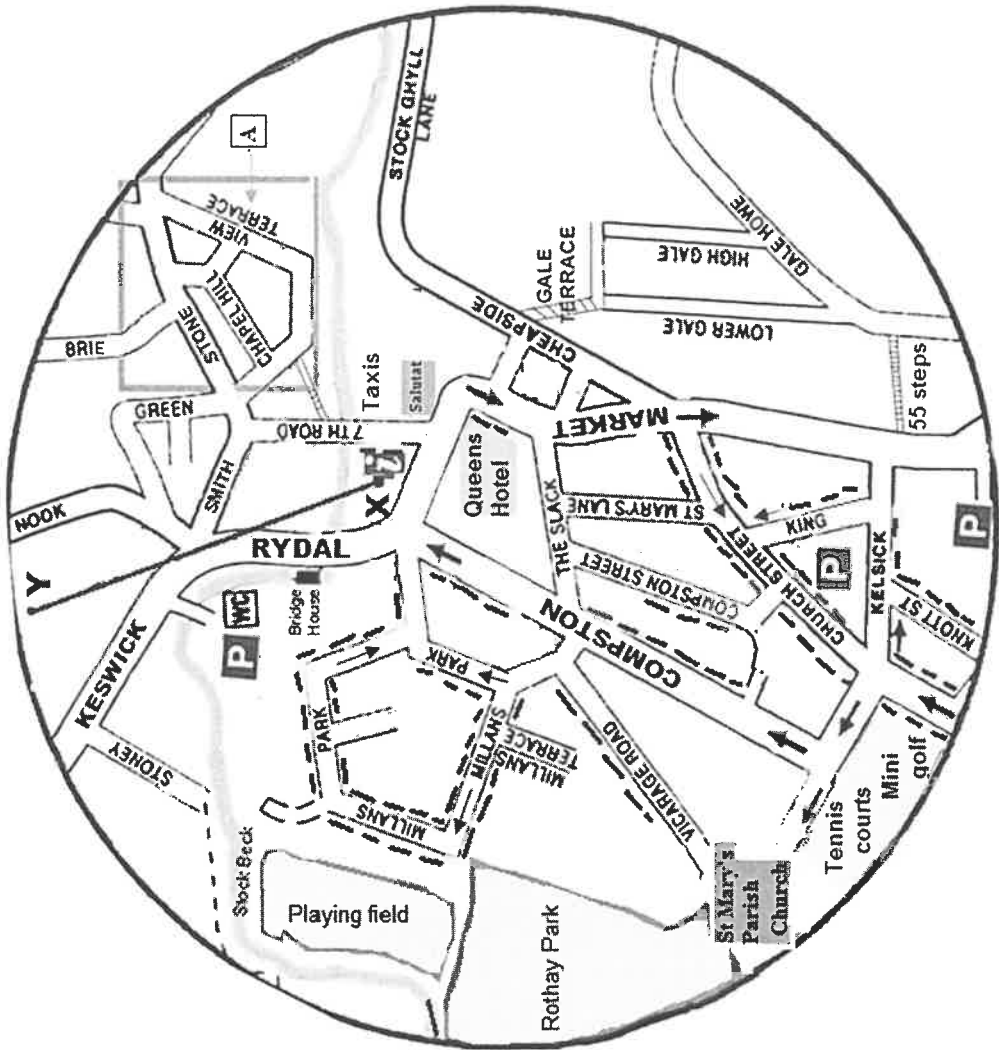
ANNEXURE B**QUESTION 2.2****TABLE WITH A SEMICIRCULAR TOP**

SQUARE BOARD WITH SIDE 2,7 m	TWO SEMICIRCULAR- SHAPED TOPS CUT FROM A SQUARE BOARD	DIMENSIONS OF THE TABLE TOP (NOT DRAWN TO SCALE)
 <p>2,7m × 2,7 m</p> <p>with a thickness of 38 mm</p>		
		





ANNEXURE C

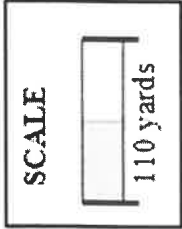
QUESTION 3.2

MAP OF AMBLESIDE TOWN CENTRE



[Adapted from amblesideonline.co.uk]

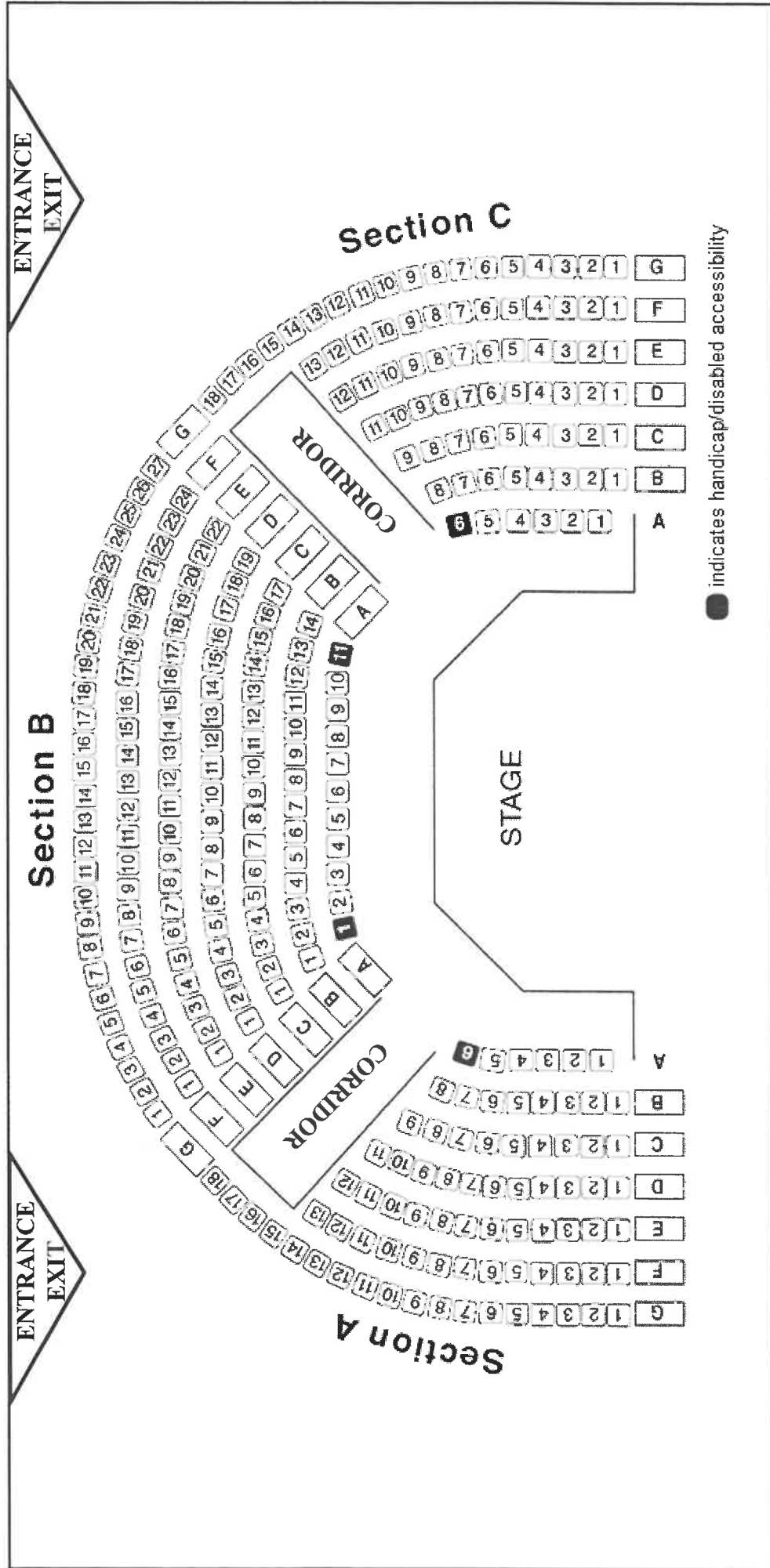
KEY:	
	Information
	Parking in this area is not allowed
	Maximum 1 hour free parking before 5 pm
	Public car park



ANNEXURE D

QUESTION 4.1

SEATING PLAN OF LAWRENCE THEATRE IN AUSTRALIA WITH A SEATING CAPACITY OF 288



[Source: wp.theatrelawrence.com]