

Need an amazing tutor?

www.teachme2.com/matric



Collected and collated by

teachme2



basic education

Department:
Basic Education
REPUBLIC OF SOUTH AFRICA

SENIOR CERTIFICATE/ NATIONAL SENIOR CERTIFICATE

GRADE 12

MATHEMATICAL LITERACY P1

ADDENDUM

NOVEMBER 2020

This addendum consists of 5 pages with 4 annexures.

ANNEXURE A

QUESTION 2.1

MARKHAM ACCOUNT STATEMENT OF D PETERSON

MARKHAMACCOUNT
STATEMENT

STATEMENT DATE: 15 JAN. 2019

MR D PETERSON
27 SECOND AVENUE
COLRIDGE
VRYBURG
8601



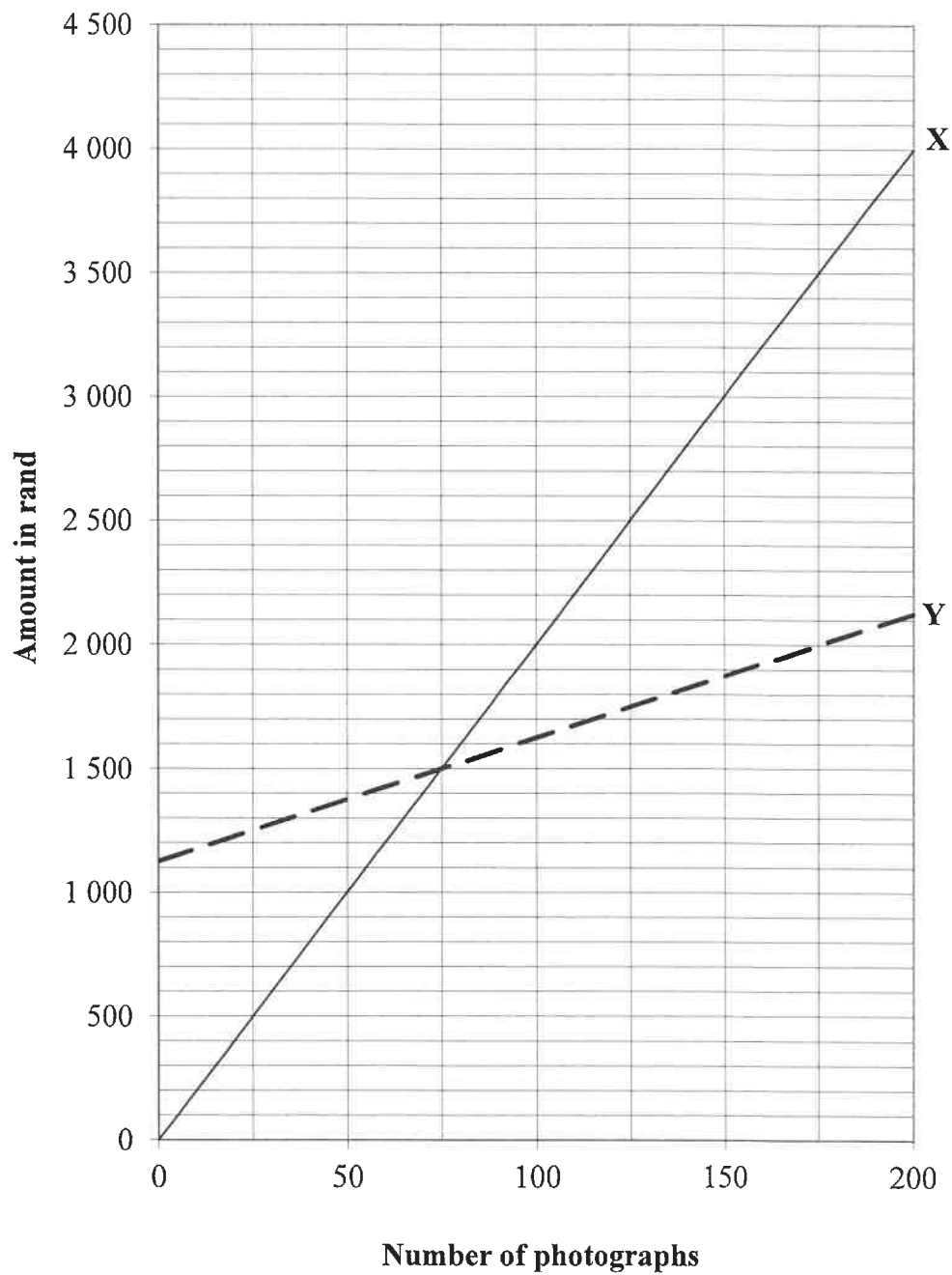
**1 CARD, EXCLUSIVE OFFERS
OVER 20 RETAIL BRANDS**

Account customers are automatically
TFG REWARDS members.

DATE	REFERENCE	DESCRIPTION	AMOUNT	
31 DEC.	6 months revolving	Opening balance	101,99	
	HO FNB electronic payment	Payment	101,99	CR
	Installment 0,00 due	Closing balance	0,00	
17 DEC.	12 months revolving	Opening balance	1 215,36	
19 DEC.	ASJ Zevenwacht Mall	Purchase	3 750,00	
19 DEC.	ASJ Zevenwacht Mall	Purchase	4 000,00	
19 DEC.	ASJ Zevenwacht Mall	Purchase returned	3 750,00	CR
31 DEC.	HO FNB electronic payment	Payment	698,01	CR
12 JAN.		My kitchen	26,70	
12 JAN.		Kids only	20,00	
12 JAN.		Interest	92,66	
	Installment 440,00 Due 38,37	Closing balance	4 656,71	

My current credit allocation	What can I spend?	What is my installment?	By how much am I in arrears?	What is my balance?
8 800,00	4 143,29	440,00	0,00	4 656,71
CURRENT	30 DAYS	60 DAYS	90 DAYS	TOTAL DUE (BY 1 ST)
38,37	0,00	0,00	0,00	38,37

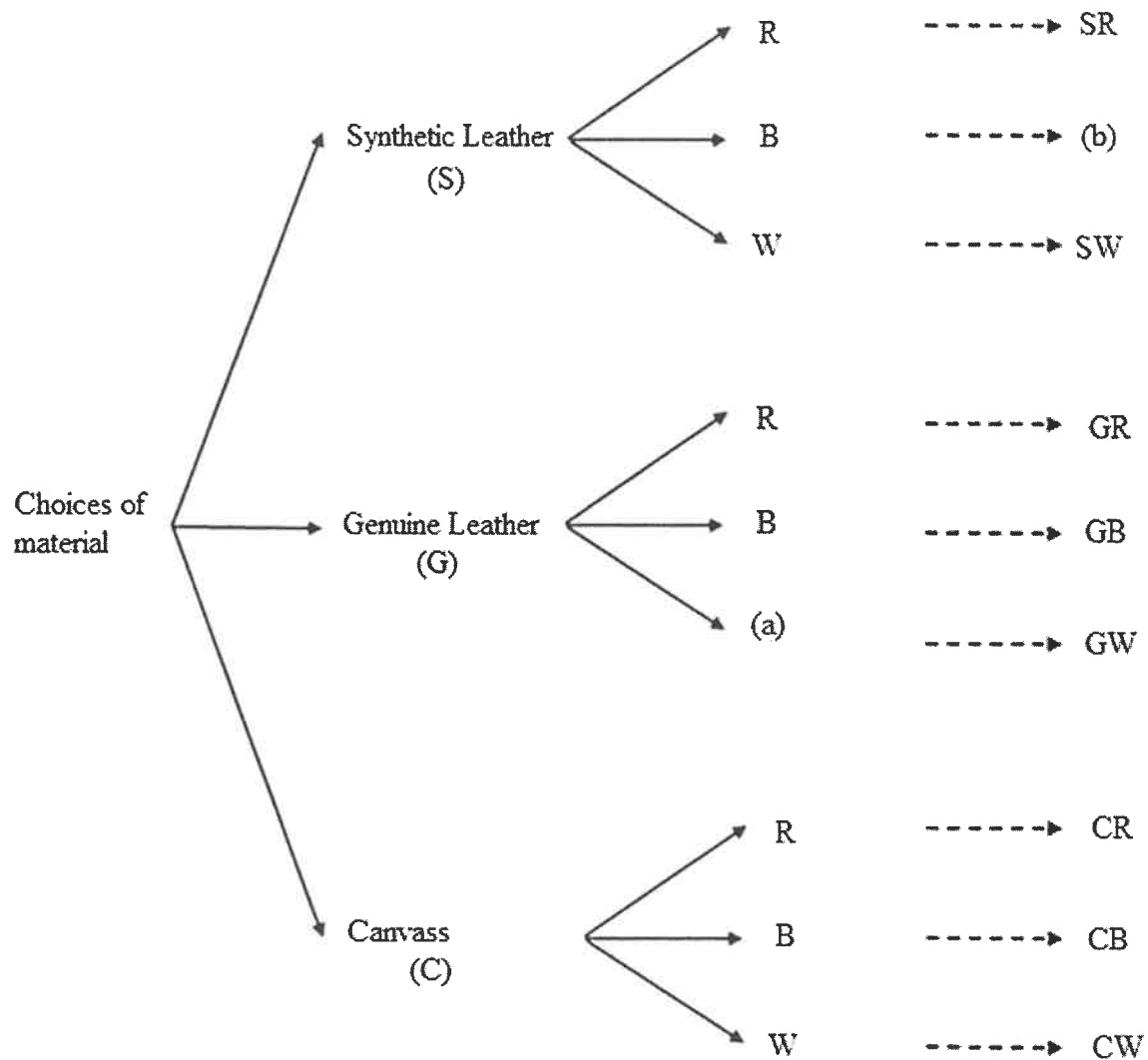
[Adapted from a Markham's account]

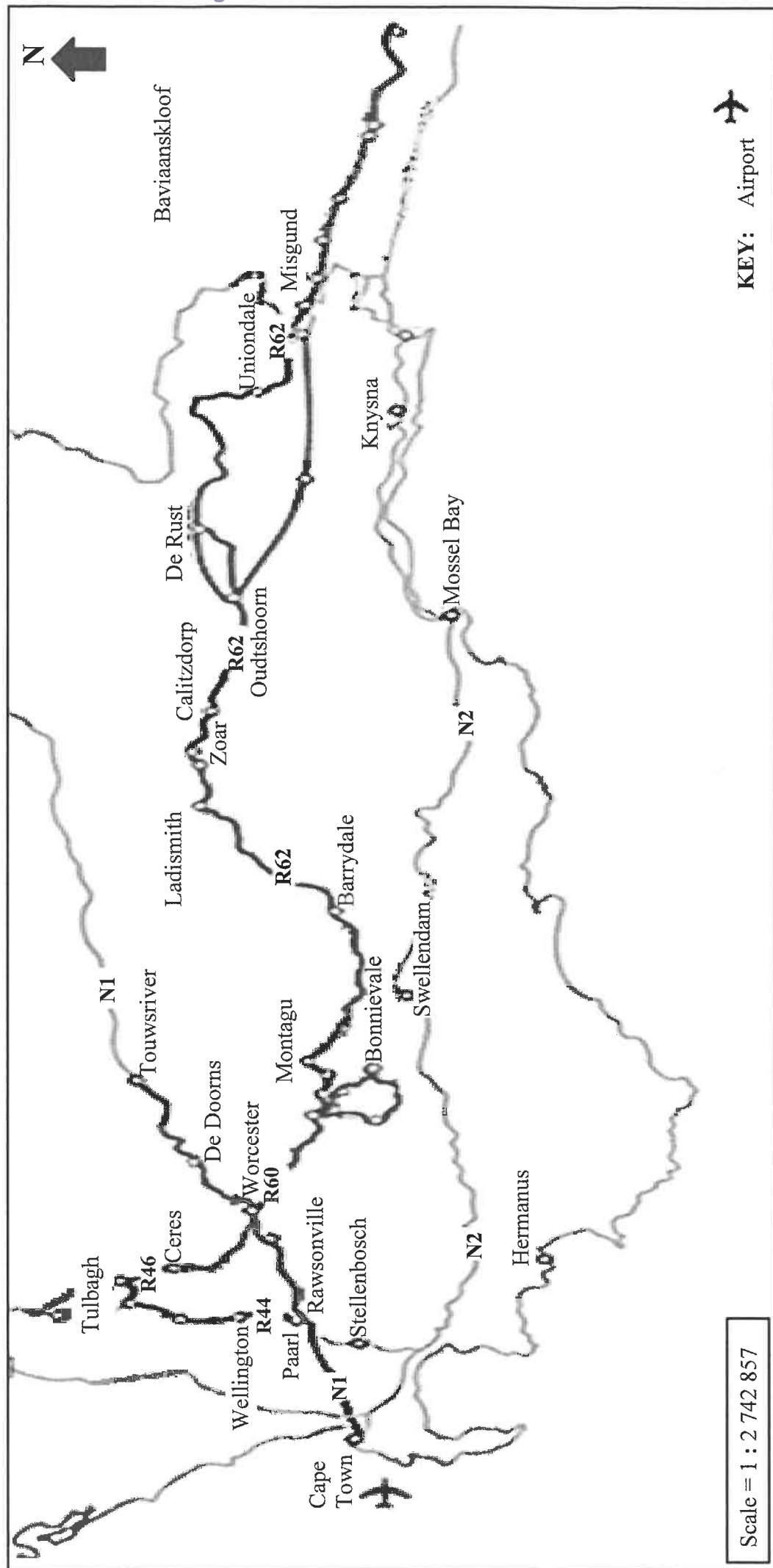
ANNEXURE B**QUESTION 2.3.4**

ANNEXURE C

TREE DIAGRAM OF DIFFERENT MATERIALS AVAILABLE

QUESTION 3.2



ANNEXURE D**QUESTION 4.1****ROUTE 62 ROAD MAP**[Adapted from www.route62.co.za]