

Need an amazing tutor?

www.teachme2.com/matric



Collected and collated by

teachme2



basic education
Department:
Basic Education
REPUBLIC OF SOUTH AFRICA

**NATIONAL
SENIOR CERTIFICATE**

GRADE 12

ENGINEERING GRAPHICS AND DESIGN P1

NOVEMBER 2023

MARKS: 100

TIME: 3 hours

This question paper consists of 6 pages.

Barcode label

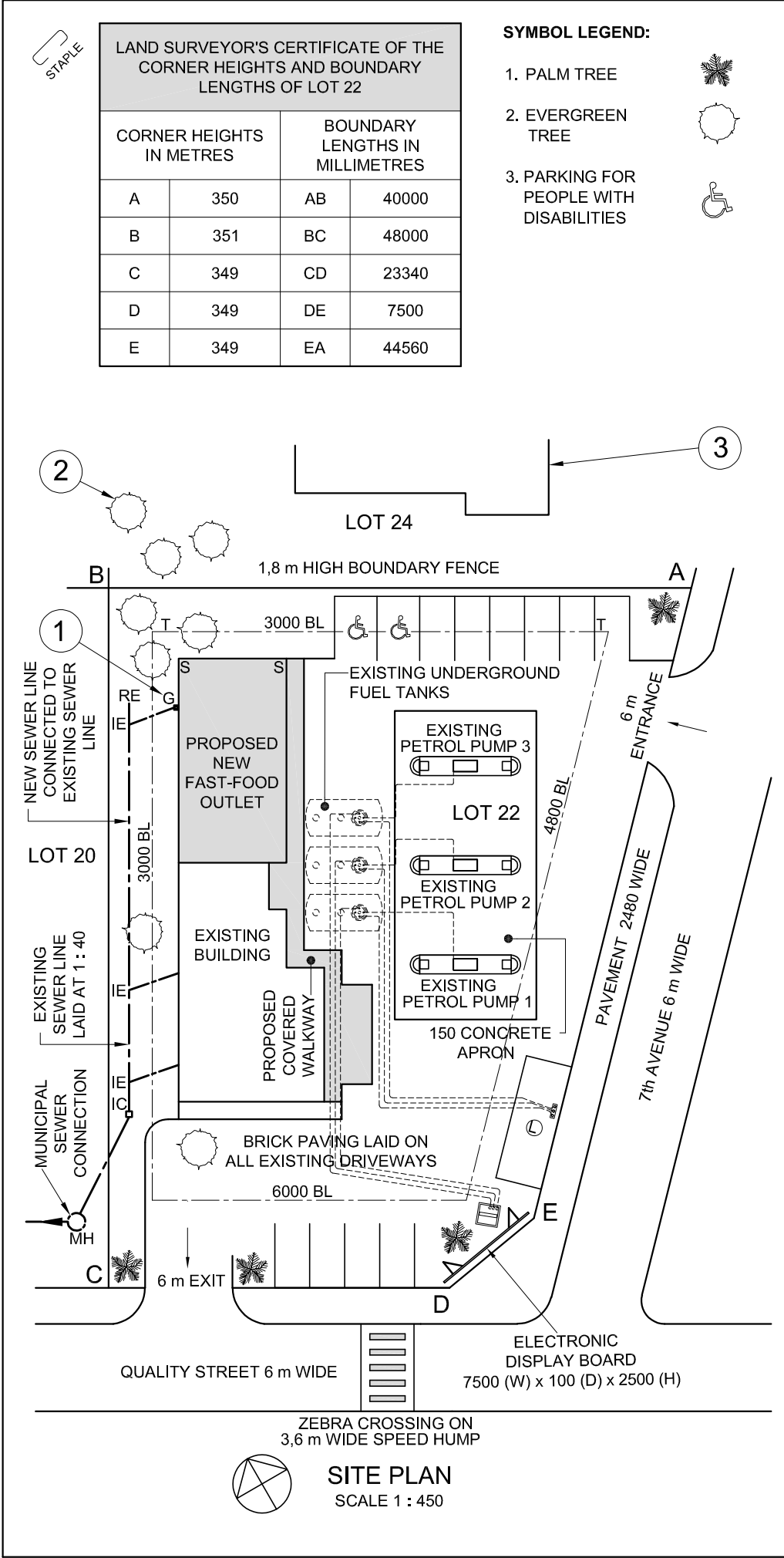
INSTRUCTIONS AND INFORMATION

1. This question paper consists of FOUR questions.
2. Answer ALL the questions.
3. ALL drawings are in first-angle orthographic projection, unless otherwise stated.
4. ALL drawings must be prepared using pencil and instruments, unless otherwise stated.
5. ALL answers must be drawn accurately and neatly.
6. ALL the questions must be answered on the QUESTION PAPER, as instructed.
7. ALL the pages, irrespective of whether the question was attempted or not, must be re-stapled in numerical sequence in the TOP LEFT-HAND CORNER ONLY.
8. Time management is essential in order to complete all the questions.
9. Print your examination number in the block provided on every page.
10. Any details or dimensions not given must be assumed in good proportion.

FOR OFFICIAL USE ONLY															
QUESTION	MARKS OBTAINED			$\frac{1}{2}$	SIGN	MODERATED			$\frac{1}{2}$	SIGN	RE-MARKING			$\frac{1}{2}$	SIGN
1															
2															
3															
4															
TOTAL															
	2	0	0			2	0	0			2	0	0		

FINAL CONVERTED MARK	CHECKED BY
100	

COMPLETE THE FOLLOWING:
CENTRE NUMBER
CENTRE NUMBER
EXAMINATION NUMBER
EXAMINATION NUMBER



NOTE:
Contractors must verify all dimensions and levels on site before commencing work. Architects to be notified immediately of any discrepancies.

ARCHITECT'S SIGNATURE
CLIENT'S SIGNATURE

ANSWER 21
In the space below, draw, in neat freehand, the *SANS 10143* graphical symbol for:
(a) SHOWER (elevation and plan)
(b) SOCKET OUTLET

(a) SHOWER (elevation and plan)

(b) SOCKET OUTLET

2	04/02/2023	REPLACE 150 CONCRETE APRON	
1	30/01/2023	NEW ENTRANCE ADDED	
REVISION	DATE	DESCRIPTION	
ACE ARCHITECTS 17 ALPINE ROAD SPRINGFIELD 4091 ACEARC@AFRICA.COM 031 208 2456			
PRINTED BY: PRINTFRIEND PRINTERS		DATE OF PRINT: 05/02/2023	
DRAWING TITLE: SITE PLAN			
PROJECT: PROPOSED NEW FAST-FOOD OUTLET AND COVERED WALKWAY FOR LAHRIE AND ASSOCIATES, LOT 22, 7th AVENUE, KLOOF			
PROJECT NUMBER: 72846-23		DRAWING NUMBER: LA - 787976	
DATE: 28/01/2023	DRAWN: S MOTALA	CHECKED: A BUX	SCALE: 1 : 450
REFERENCE CODE: 12183124			

QUESTION 1: ANALYTICAL (CIVIL)

Given:

The site plan of an existing service station with a proposed new fast-food outlet and a covered walkway, a title panel and a table of questions. The drawing is not presented to the indicated scale.

Instructions:

Complete the table below by neatly answering the questions, which refer to the accompanying drawing, title panel and civil content.

QUESTIONS

ANSWERS

1	What is the e-mail address of the architectural firm?		1		
2	What scale is indicated for the site plan?		1		
3	When was the first revision made to the drawing?		1		
4	Into which street does the service station exit?		1		
5	What is the height of the highest corner of LOT 22 in metres?		1		
6	What is the finish on all the existing driveways?		1		
7	How many existing underground fuel tanks are shown?		1		
8	On what feature in the road is the zebra crossing?		1		
9	What is the fall of the existing sewer line?		1		
10	What is the height of the electronic display board in millimetres?		1		
11	What does the abbreviation G at 1 stand for?		1		
12	Name the feature at 2.		1		
13	What does the feature at 3 indicate?		1		
14	To what must the new sewerage line be connected?		1		
15	What is the thickness of the concrete apron in metres?		1		
16	In what colour must new walkways be indicated on site plans?		1		
17	Which elevation of the new fast-food outlet faces 7th Avenue?		2		
18	If wall S-S on the new fast-food outlet is 4,8 m from boundary line AB, how far is it from building line T-T in millimetres?		2		
19	In the space below (ANSWER 19), determine the perimeter of LOT 22 in metres.		3		
20	In the space below (ANSWER 20), determine the total area of the existing building in square metres.		3		
21	In the space in the title panel (ANSWER 21), draw, in neat freehand, the <i>SANS 10143</i> graphical symbol for: (a) SHOWER (elevation and plan) and (b) SOCKET OUTLET.		4		
TOTAL			30		

ANSWER 19
Show ALL calculations.
(Do NOT round off the answer.)

ANSWER 20
Show ALL calculations.
(Do NOT round off the answer.)

EXISTING BUILDING

16400

6200

2600

9200

13200

10000

EXAMINATION NUMBER

EXAMINATION NUMBER

2

Copyright reserved

Please turn over

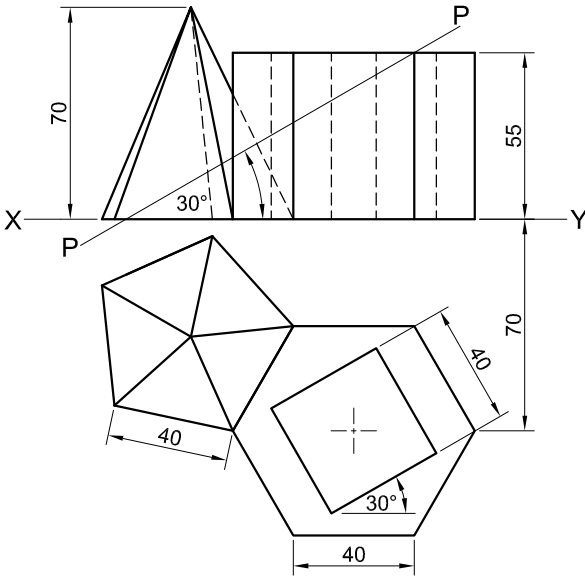


QUESTION 2: SOLID GEOMETRY

- Given:**
- The front view and top view of a right regular pentagonal pyramid with one base edge in contact with a base edge of a right regular hexagonal prism. The prism is centrally pierced by a right square prismatic hole.
 - Cutting plane P-P, that cuts both solids

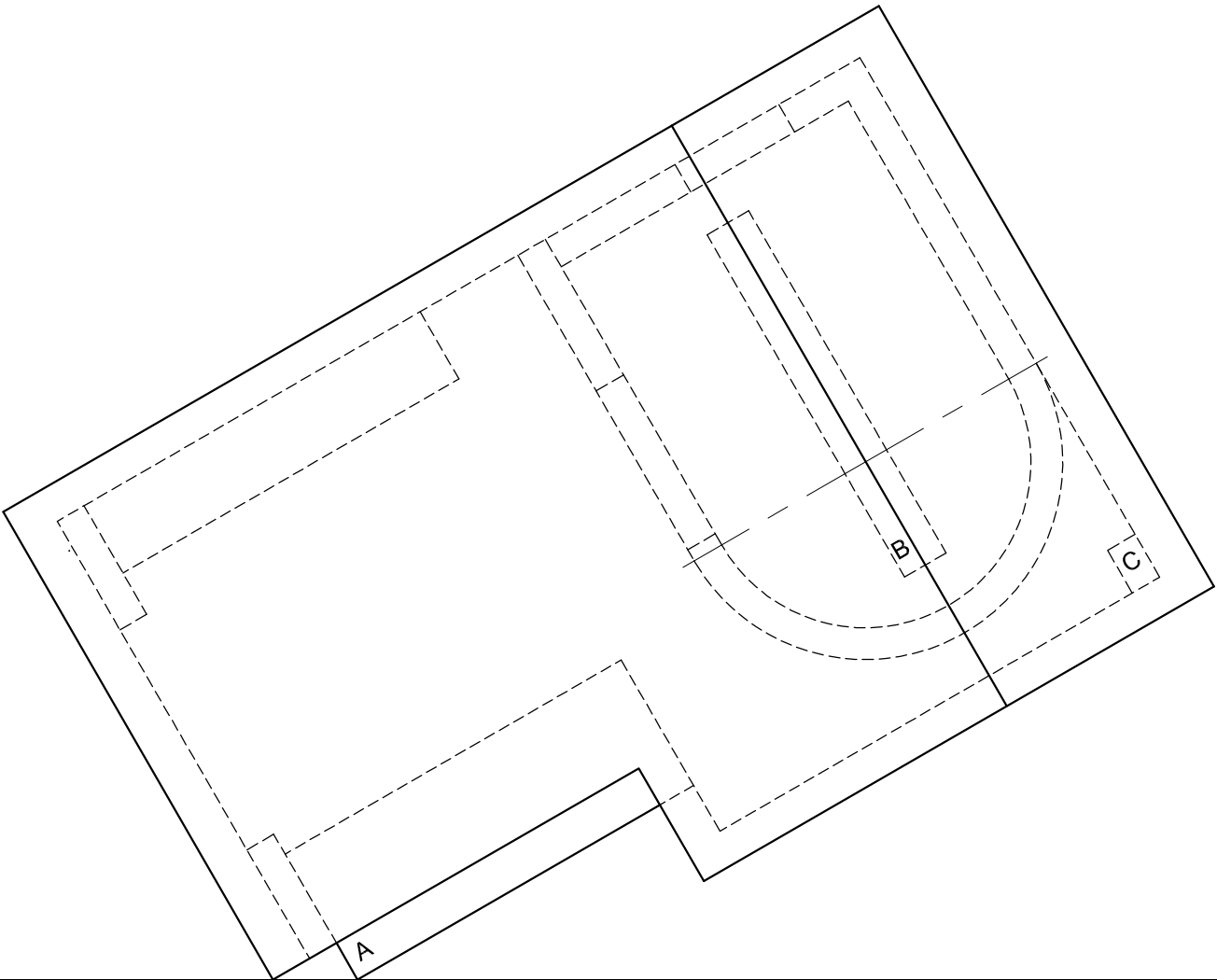
- Instructions:**
Draw, to scale 1 : 1, the following views of both solids:
- 2.1 The given front view
 - 2.2 A sectional top view
 - 2.3 A sectional left view

- Planning is essential.
 - Show ALL hidden detail.
 - Show ALL construction.
- [38]



ASSESSMENT CRITERIA				
1	SECTIONAL TOP VIEW	15 ¹ / ₂		
2	FRONT VIEW	8 ¹ / ₂		
3	SECTIONAL LEFT VIEW	14		
PENALTIES (-)				
TOTAL		38		
EXAMINATION NUMBER				
EXAMINATION NUMBER				3

Need an amazing tutor? www.teachme2.com/matric



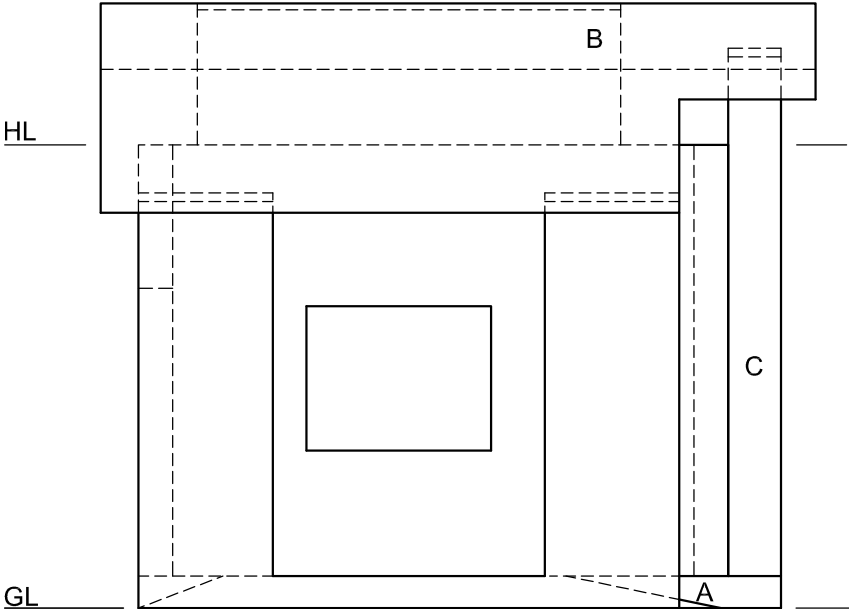
PP

QUESTION 3: PERSPECTIVE

Given:
Three views of a covered drive-through ticket booth and the information needed to draw a two-point perspective drawing
PP – Picture plane
HL – Horizon line
GL – Ground line
SP – Station point

- Instructions:**
Complete the perspective drawing.
- Align the drawing sheet with the ground line (GL).
 - Determine and label the vanishing points.
 - Show ALL construction.
 - Show depth at the window.
 - Show ALL interior detail as seen through the window.
 - NO hidden detail is required.
- [40]

ASSESSMENT CRITERIA					
1	CONSTRUCTION	6			
2	FLOOR	11			
3	WALLS	8 1/2			
4	ROOF	4 1/2			
5	WINDOWS + ARC	10			
PENALTIES (-)					
TOTAL		40			



HL

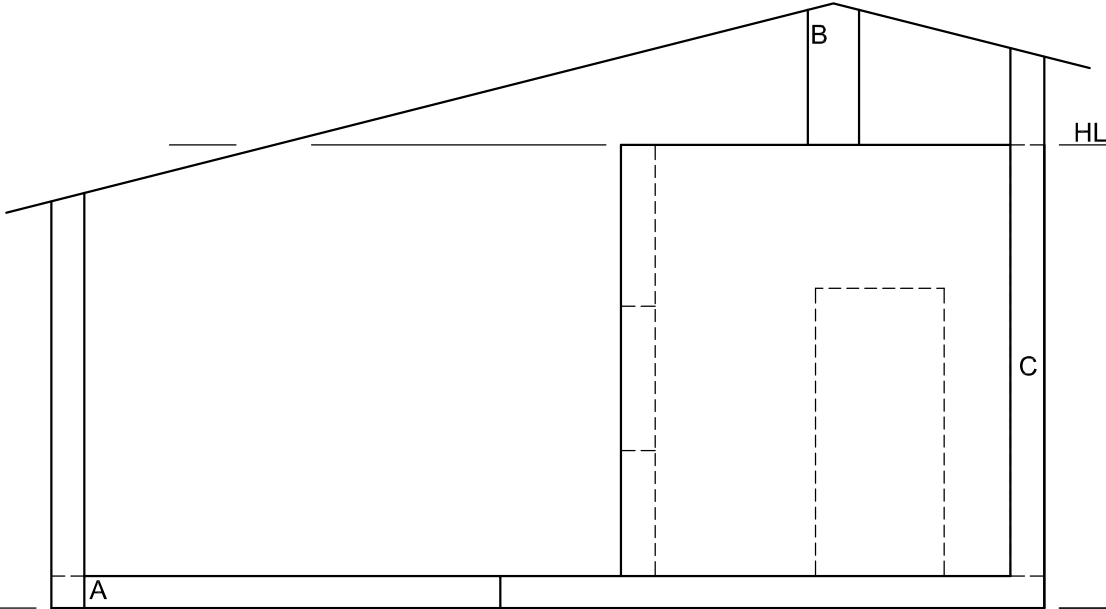
GL

C

B

A

SP



HL

C

B

A

EXAMINATION NUMBER	
EXAMINATION NUMBER	
4	

300 x 75 mm BARGE BOARD
ROOF CAP
RIDGE CAP
150 x 100 mm GUTTER ON 200 x 20 mm FASCIA BOARD
Ø80 mm RWDP THAT STOPS 50 mm ABOVE GROUND LEVEL
WINDOW OPENING
SLIDING DOOR OPENING
150 x 300 mm FRONT STEPS WITH SIDE WALLS
FINISHED FLOOR LEVEL
GROUND LEVEL

INCOMPLETE NORTH-EAST ELEVATION

ROOM DESIGNATIONS

FLOOR FINISHES

1. OPEN AREA:	TILE
2. BATHROOM:	TILE
3. BEDROOM:	CARPET
4. OFFICE:	LAMINATE

FEATURES
D1 SLIDING DOOR
D2 DOOR
W1 WINDOW
W2 WINDOW

FIXTURES
B BATH
S SINK
WC TOILET
WB WASH BASIN

ELECTRICAL FITTINGS
1. ONE-WAY SWITCH - SINGLE-POLE
2. TWO-WAY SWITCH
3. FLUORESCENT LIGHT 4 x 40 W
4. CEILING LIGHT
5. SWITCHED SOCKET OUTLET
6. DISTRIBUTION BOARD

NOTE:
THE ARROW SHOWS THE LIGHT CONNECTION TO THE SWITCH.

INCOMPLETE FLOOR PLAN

FRONT STEP AND SIDE WALL DETAIL

INCOMPLETE SCHEMATIC DIAGRAM OF A ROOF TRUSS AT CUTTING PLANE A-A

ROOF NOTES:
20° ROOF PITCH
114 x 40 mm ROOF TRUSSES ON 114 x 40 mm WALL PLATES
400 mm ROOF OVERHANG TO END OF ROOF TRUSS
40 mm CORRUGATED ROOF SHEET ON 75 x 50 mm PURLINS @ 1000 mm c/c
300 x 75 mm BARGE BOARD ON GABLE ENDS AND 200 x 20 mm FASCIA BOARD WITH 150 x 100 mm GUTTERS ON ALL SIDES
10 mm CEILING BOARD ON 40 x 40 mm BRANDING STRIPS @ 450 mm c/c

INCOMPLETE FOUNDATION AND EXTERNAL WALL DETAIL

DOOR AND WINDOW SCHEDULE

SLIDING DOOR (D1)
DOOR (D2)
WINDOW (W1)
WINDOW (W2)

WINDOW NOTES:
• A = OPENING SIDE
• B = FIXED PANEL
• ALL FRAMES = 50 mm THICK
• 200 x 20 mm FIBRE CEMENT SILL UNDER ALL WINDOWS

ROOF COMPONENTS	
	200 x 20 mm FASCIA BOARD
	150 x 100 mm GUTTER
	75 x 50 mm PURLINS
	300 x 75 mm BARGE BOARD
	ROOF CAP AND RIDGE CAP

ELECTRICAL SYMBOLS	

FIXTURES

BATH (B)
SINK (S)
TOILET (WC)
WASH BASIN (WB)

QUESTION 4: CIVIL DRAWING

Given:

- The incomplete north-east elevation of a **new house**, showing the walls, the window and sliding door openings, the front steps, roof and labels
- The incomplete floor plan showing the walls, front steps, positions of the doors, windows, fixtures and electrical layout
- The front step and side wall detail
- An incomplete schematic diagram of a roof truss at cutting plane A-A and roof notes
- The incomplete foundation and external wall detail
- Room designations and floor finishes
- A door and window schedule
- A table of roof components
- A table of electrical symbols
- A table of fixtures
- The incomplete floor plan and ground level of the **new house**, drawn to scale 1 : 50, and the incomplete foundation and break lines for the detailed section, drawn to scale 1 : 20, on page 6

Instructions:
Answer this question on page 6.

4.1 Using the given incomplete floor plan and ground level, draw, to scale 1 : 50, the following views of the **new house**:

4.1.1 **THE COMPLETE FLOOR PLAN**
Add the following features to the drawing:

- ALL doors and windows
- ALL fixtures as indicated by abbreviations
- ALL electrical fittings as indicated by the numbers
- ALL hatching detail

4.1.2 **THE COMPLETE NORTH-EAST ELEVATION**
Show the following features on the drawing:

- The outside walls, window, sliding door and step detail
- The roof detail including the fascia boards, barge board, gutters and rainwater down-pipe
- The finished floor level

4.2 Using the incomplete foundation and break lines on page 6, draw, to scale 1 : 20, a **DETAILED SECTION** on cutting plane A-A of the area in the ellipse shown on the incomplete floor plan.

Show the following features on the drawing:

- The complete foundation, external wall, slab and window detail
- The roof detail including ALL rainwater items
- The W2 window, roof and rainwater item detail, to the right (north-west) of cutting plane A-A
- ALL hatching detail. ONLY the substructure hatching may be drawn in neat freehand.

Label the following:

- The floor finishes
- Ground level, finished floor level and damp-proof course (use the correct abbreviations and show them on ALL relevant views)

NOTE:
ALL drawings must comply with the **guidelines** and **graphical symbols** as contained in the **SANS 10143**.

[92]

5

Copyright reserved

Please turn over

GL

NORTH-EAST ELEVATION

ROOF LINE

BEDROOM

BATHROOM

OFFICE

OPEN AREA

RWDP

RWDP

FLOOR PLAN

SCALE 1 : 50

SECTION A-A

SCALE 1 : 20

MARK ALLOCATION FOR SECTION OF ROOF			FOR OFFICIAL USE ONLY		
A			INCORRECT SCALE(S) USED		
B			NON-ALIGNMENT OF VIEWS		
C			VIEW(S) ROTATED		
D			SECTION VIEWED INCORRECTLY		
E			INCORRECT LETTERING		
F					
G					
H					
J					
TOTAL			TOTAL		

ASSESSMENT CRITERIA				
FLOOR PLAN				
		POSSIBLE	OBTAINED	SIGN
1	DOORS + WINDOWS	13 1/2		
2	FIXTURES	8		
3	ELECTRICAL	9 1/2		
4	HATCHING	3		
5	LABELS	2		
SUBTOTAL		36		
NORTH-EAST ELEVATION				
1	ROOF + RWDP	8 1/2		
2	WALLS + STEPS	7		
3	DOOR + WINDOW	8		
4	LABELS	1 1/2		
SUBTOTAL		24		
DETAILED SECTION				
1	ROOF DETAIL	13 1/2		
2	SLAB + WALL	4 1/2		
3	HATCHING	5 1/2		
4	WINDOWS	7		
5	LABELS	1 1/2		
SUBTOTAL		32		
TOTAL		92		
PENALTIES (-)				
GRAND TOTAL				
EXAMINATION NUMBER				
EXAMINATION NUMBER				6

Need an amazing tutor? www.teachme2.com/matric