

Need an amazing tutor?

www.teachme2.com/matric



Collected and collated by

teachme2



basic education

Department:
Basic Education
REPUBLIC OF SOUTH AFRICA

SENIOR CERTIFICATE/
NATIONAL SENIOR CERTIFICATE

GRADE 12

ENGINEERING GRAPHICS AND DESIGN P1

NOVEMBER 2020

MARKS: 100

TIME: 3 hours

This question paper consists of 6 pages.

Barcode label



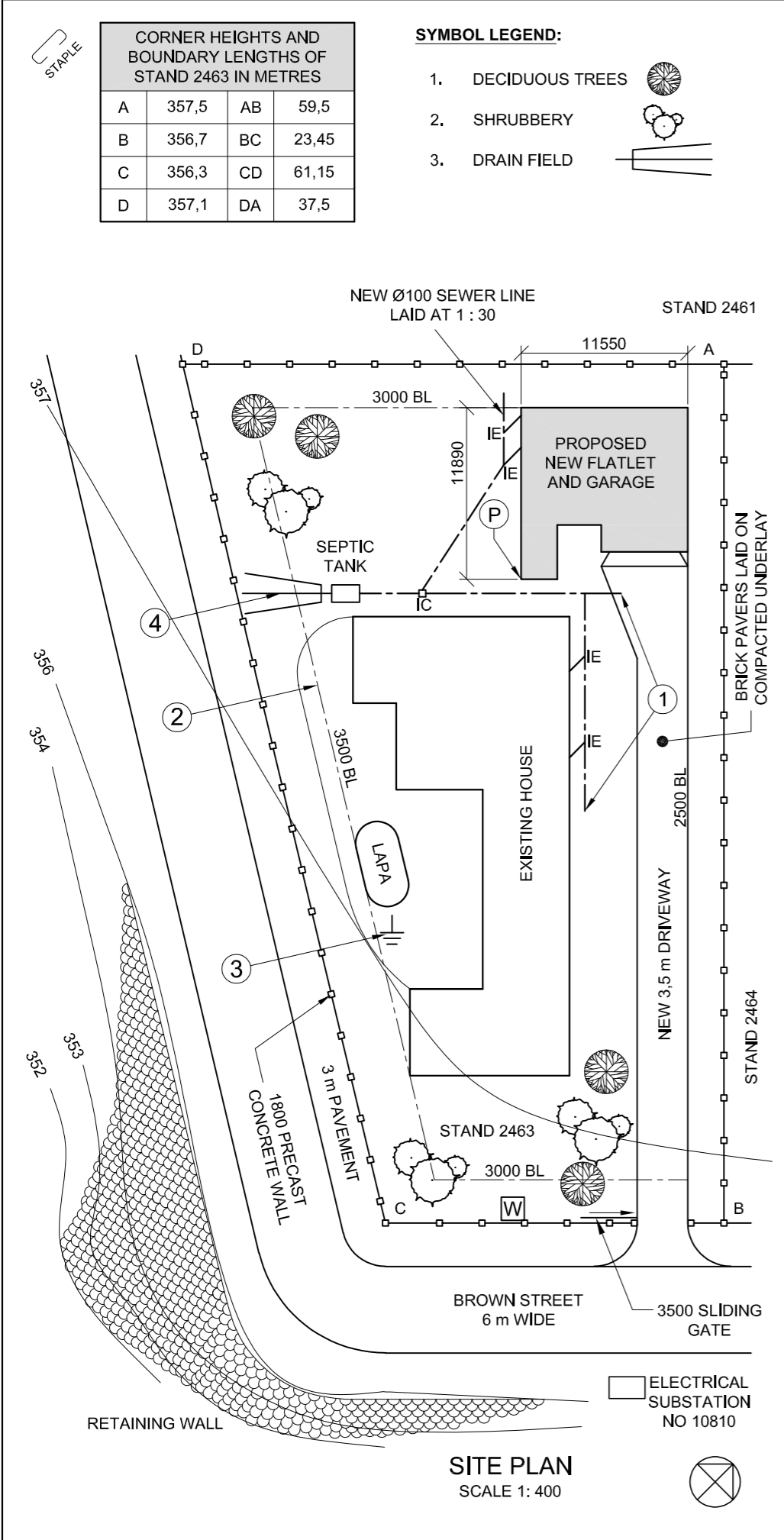
INSTRUCTIONS AND INFORMATION

1. This question paper consists of FOUR questions.
2. Answer ALL the questions.
3. ALL drawings are in first-angle orthographic projection, unless otherwise stated.
4. ALL drawings must be prepared using pencil and instruments, unless otherwise stated.
5. ALL answers must be drawn accurately and neatly.
6. ALL the questions must be answered on the QUESTION PAPER, as instructed.
7. ALL the pages, irrespective of whether the question was attempted or not, must be re-stapled in numerical sequence in the TOP LEFT-HAND CORNER ONLY.
8. Time management is essential in order to complete all the questions.
9. Print your examination number in the block provided on every page.
10. Any details or dimensions not given must be assumed in good proportion.

FOR OFFICIAL USE ONLY															
QUESTION	MARKS OBTAINED			$\frac{1}{2}$	SIGN	MODERATED			$\frac{1}{2}$	SIGN	RE-MARKING			$\frac{1}{2}$	SIGN
1															
2															
3															
4															
TOTAL															
	2	0	0			2	0	0			2	0	0		

FINAL CONVERTED MARK	CHECKED BY
100	

COMPLETE THE FOLLOWING:
CENTRE NUMBER
CENTRE NUMBER
EXAMINATION NUMBER
EXAMINATION NUMBER



NOTE:
Contractors must verify all dimensions and levels on site before commencing work. Architects to be notified immediately of any discrepancies.

ARCHITECT'S SIGNATURE:
CLIENT'S SIGNATURE:

ANSWER 20

In the space below, draw, in neat freehand, the front view and top view of the SANS 10143 graphical symbol for a SINGLE SLAB or STALL TYPE URINAL.

1	2019-07-08	ADD COLOUR FOR NEW WORK
REVISION	DATE	DESCRIPTION

FUNKY DESIGNS

52 Rex Street, George

041 640 4321

fd.architects@yahoo.com

PRINTED BY:

TIME-PRINT

DATE OF PRINT:

2019-09-21

DRAWING TITLE:

SITE PLAN

PROJECT:

PROPOSED NEW FLATLET AND GARAGE FOR MR A BOBANI ON STAND 2463, BROWN STREET, GEORGE, 6529.

PROJECT NUMBER:

FDBS-2019

DRAWING NUMBER:

1 OF 6

DATE:

2019-07-05

DRAWN:

CALIB

CHECKED:

ASHLEY

SCALE:

1 : 400

REFERENCE CODE:

422-2019

QUESTION 1: ANALYTICAL (CIVIL)

Given:

The site plan of an existing house and a proposed new flatlet and garage, a title panel and a table of questions. The drawing has not been prepared to the indicated scale.

Instructions:

Complete the table below by neatly answering the questions, which refer to the accompanying drawing, title panel and civil content.

QUESTIONS		ANSWERS	
1	What is the reference code of the drawing?	1	
2	Who is the client?	1	
3	On what date was the drawing printed?	1	
4	How many signatures are required?	1	
5	How many stands border STAND 2463?	1	
6	What is the number of the electrical substation?	1	
7	What does the abbreviation IC stand for?	1	
8	What is the height of the precast concrete wall in metres?	1	
9	What is the abbreviation of the component that you will find at 1?	1	
10	What is the colour that must be added to new work, as indicated in the revision?	1	
11	What does the chain line at 2 indicate?	1	
12	Name the symbol at 3.	1	
13	Name the feature at 4.	1	
14	What is the fall of the new sewer line?	1	
15	Which elevation of the existing house faces the new flatlet?	2	
16	What is the total height of the retaining wall in metres?	2	
17	Determine the distance from boundary AD to the reference corner P on the proposed new flatlet in metres.	2	
18	In the space below (ANSWER 18), determine the total length of the precast concrete fence in metres.	3	
19	In the space below (ANSWER 19), determine the total area of the proposed new flatlet and garage in square metres. Round the answer off to TWO decimal places.	3	
20	In the space in the title panel (ANSWER 20), draw, in neat freehand, the front view and top view of the SANS 10143 graphical symbol for a SINGLE SLAB or STALL TYPE URINAL.	4	
TOTAL		30	

ANSWER 18

Show ALL calculations.

11890

10000

2500

5550

6000

3750

PROPOSED NEW FLATLET AND GARAGE

ANSWER 19

Show ALL calculations.

EXAMINATION NUMBER

EXAMINATION NUMBER

2

Copyright reserved

BASIC EDUCATION

Please turn over

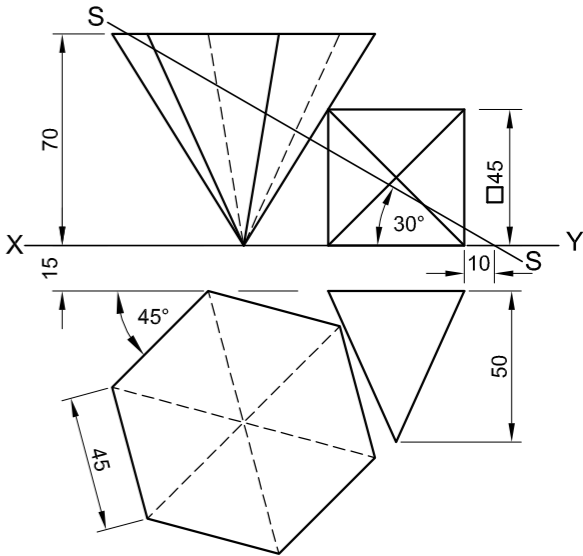


QUESTION 2: SOLID GEOMETRY

- Given:**
- The front view and the top view of a right regular hexagonal pyramid and a right square pyramid
 - Cutting plane S-S

- Specifications:**
- The two solids do not touch
 - Both solids are cut by cutting plane S-S

- Instructions:**
Draw, to scale 1 : 1, the following views of the TWO solids:
- 2.1 The given front view
 - 2.2 A sectional top view
 - 2.3 A sectional right view
 - 2.4 The true shape of the cut surface of the hexagonal pyramid
- Planning is essential.
 - Show ALL construction.
 - Show ALL hidden detail.
- [38]



ASSESSMENT CRITERIA					
1	FRONT VIEW	7½			
2	SECTIONAL TOP VIEW + CONSTRUCTION	13½			
3	SECTIONAL RIGHT VIEW	11½			
4	TRUE SHAPE	5½			
PENALTIES (-)					
TOTAL		38			
EXAMINATION NUMBER					
EXAMINATION NUMBER					
EXAMINATION NUMBER					3

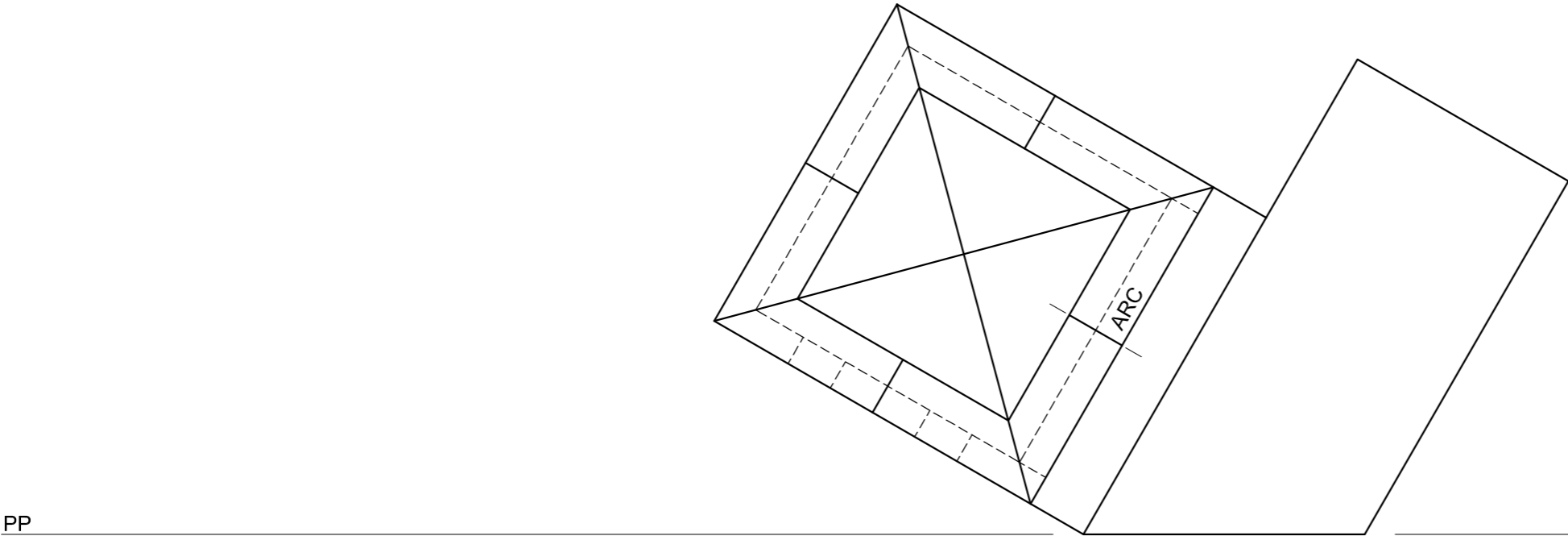


QUESTION 3: PERSPECTIVE

Given:
Three views of a building and the information needed to draw a two-point perspective drawing
PP – Picture plane
HL – Horizon line
GL – Ground line
SP – Station point

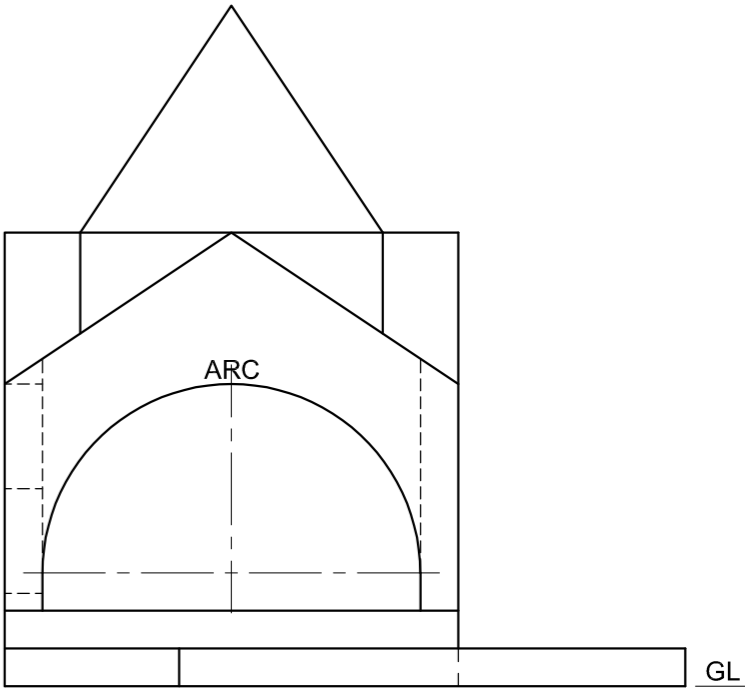
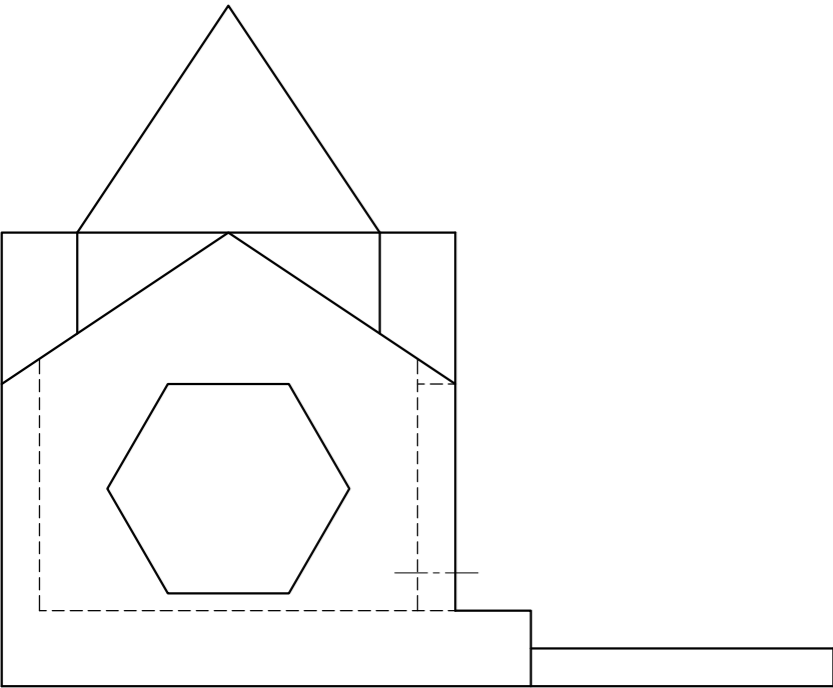
- Instructions:**
Complete the perspective drawing.
- Align the drawing sheet with the ground line (GL).
 - Determine and label the vanishing points.
 - Show ALL construction.
 - Show internal lines seen through the hexagonal and arc openings.
 - NO hidden detail is required.
- [38]

ASSESSMENT CRITERIA					
1	CONSTRUCTION	6			
2	WALLS	10½			
3	HEXAGONAL OPENING	5½			
4	ROOF	9½			
5	ARC	6½			
PENALTIES (→)					
TOTAL		38			



PP

HL



SP

GL

EXAMINATION NUMBER	
EXAMINATION NUMBER	
4	

ROOF CAP
RIDGE COVER

150 x 100 mm GUTTER ON 200 x 20 mm FASCIA BOARD WITH Ø100 mm RWDP THAT STOPS 50 mm ABOVE THE GULLY

WINDOW OPENING
DOOR OPENING

FINISHED FLOOR LEVEL
GROUND LEVEL

300 x 300 x 150 mm GULLY

INCOMPLETE SOUTH ELEVATION

INCOMPLETE FLOOR PLAN

SCHEMATIC DIAGRAM OF A COMPLETE ROOF TRUSS

SCHEMATIC DIAGRAM OF THE ROOF TRUSS AT A-A

ROOF NOTES:
20° ROOF PITCH

114 x 40 mm ROOF TRUSS ON 114 x 40 mm WALL PLATES

300 mm ROOF OVERHANG TO END OF ROOF TRUSS

20 mm FIBRE CEMENT ROOF SHEETING ON 75 x 50 mm PURLINS @ 750 mm c/c

200 x 20 mm FASCIA BOARDS WITH 150 x 100 mm GUTTERS ON ALL SIDES

10 mm CEILING BOARD ON 40 x 40 mm BRANDERING STRIPS @ 600 mm c/c

FEATURES
D DOOR
W1 TO W3 WINDOWS

FIXTURES
WC TOILET
WB WASHBASIN
B BATH
S SINK
BIC BUILT-IN CUPBOARD

ELECTRICAL FITTINGS
1. ONE-WAY SWITCH - SINGLE-POLE
2. ONE-WAY SWITCH - DOUBLE-POLE
3. FLUORESCENT LIGHT 2 x 40 W
4. WALL-MOUNTED LIGHT
5. CEILING LIGHT
6. SWITCHED SOCKET OUTLET
7. DISTRIBUTION BOARD

NOTE:
THE ARROW SHOWS THE LIGHT CONNECTION TO THE SWITCH.

ROOM DESIGNATIONS

FLOOR FINISHES
1 BEDROOM: CARPET
2 BATHROOM: TILE
3 KITCHEN: WOOD
4 LOUNGE: WOOD

ELECTRICAL SYMBOLS

WINDOW NOTES:

- A = OPENING SIDE
- B = HINGED SIDE
- C = FIXED PANEL
- ALL FRAMES = 50 mm
- 150 x 20 mm FIBRE CEMENT SILL UNDER ALL WINDOWS

DOOR AND WINDOW SCHEDULE

50 mm DOOR FRAME AND DOOR (D)

WINDOW (W1)

WINDOW (W2)

WINDOW (W3)

ROOF COMPONENTS

	114 x 40 mm WALL PLATE
	ROOF CAP AND RIDGE COVER
	150 x 100 mm GUTTER
	200 x 20 mm FASCIA BOARD

FIXTURES

TOILET (WC)

WASHBASIN (WB)

BATH (B)

SINK (S)

BUILT-IN-CUPBOARD (BIC)

NOTE:
KITCHEN CUPBOARD 850 mm HIGH

INCOMPLETE FOUNDATION AND EXTERNAL WALL DETAIL

QUESTION 4: CIVIL DRAWING

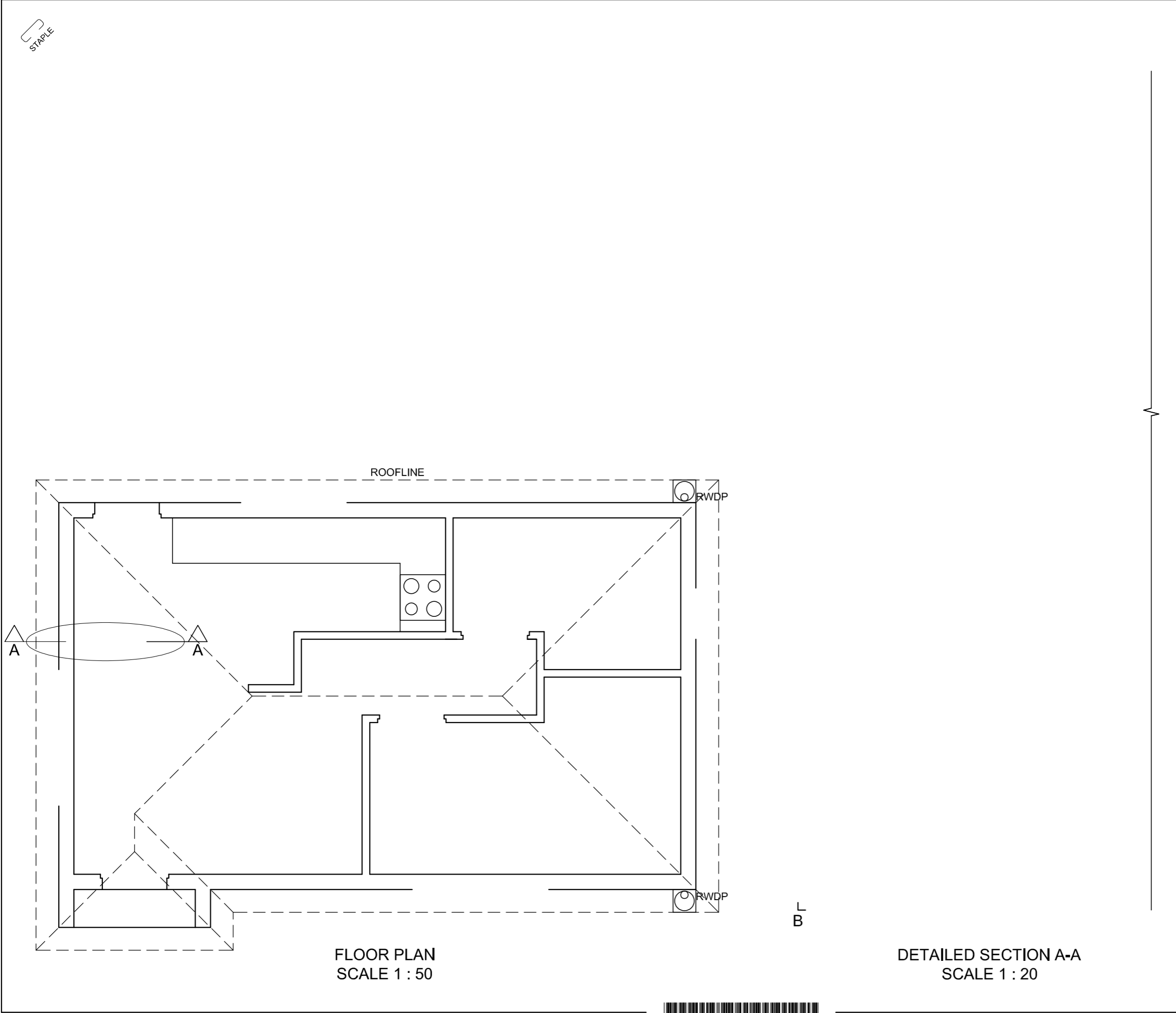
- Given:**
- The incomplete south elevation of a **new house**, showing the walls, the door and window openings, the roof and labels
 - The incomplete floor plan showing the walls, positions of the doors, windows, fixtures and the electrical layout
 - Schematic diagrams of roof trusses and roof notes
 - The incomplete foundation and external wall detail
 - Room designations and floor finishes
 - A table of electrical symbols
 - A table of roof components
 - A table of fixtures
 - A door and window schedule
 - The incomplete floor plan of the **new house**, drawn to scale 1 : 50, and corner 'B' of the foundation and the break line for the detailed section, drawn to scale 1 : 20, on page 6

- Instructions:**
Answer this question on page 6.
- 4.1 Using the given incomplete floor plan, draw, in first-angle orthographic projection and to scale 1 : 50, the following views of the **new house**:
- 4.1.1 **THE COMPLETE FLOOR PLAN**
Add the following features to the drawing:
- ALL doors and windows
 - The fixtures as indicated by the abbreviations
 - ALL electrical fittings as indicated by the numbers
 - ALL hatching detail
- 4.1.2 **THE COMPLETE SOUTH ELEVATION**
Show the following features on the drawing:
- The outside walls, step, door and window detail
 - The roof detail, including the fascia boards, gutters and rainwater down-pipe
 - The finished floor level
- 4.2 Using corner 'B' of the foundation and the break line on page 6, draw, to scale 1 : 20, a **DETAILED SECTION** on cutting plane A-A of the area in the ellipse shown on the incomplete floor plan.
- Show the following features on the drawing:**
- The foundation and external wall detail
 - The roof detail, including the fascia board and gutter
 - The door frame and kitchen cupboard north of (above) the ellipse
 - ALL hatching detail. ONLY the substructure hatching may be drawn in neat freehand.

- Label the following:**
- The south elevation
 - The room designations and floor finishes
 - Ground level, finished floor level, damp-proof course and built-in cupboard (use the correct abbreviations and show it on ALL the relevant views)

NOTE:
ALL drawings must comply with the **guidelines** and **graphical symbols** as contained in the *SANS 10143*. [94]

Need an amazing tutor? www.teachme2.com/matric



MARK ALLOCATION FOR ROOF SECTION (4.2)		FOR OFFICIAL USE ONLY	
A		INCORRECT SCALE	
B		NON-ALIGNMENT OF VIEWS	
C		VIEW(S) ROTATED	
D		SECTION VIEWED INCORRECTLY	
E		INCORRECT LETTERING	
F			
G			
H			
I			
TOTAL		TOTAL	

ASSESSMENT CRITERIA					
FLOOR PLAN					
		POSSIBLE	OBTAINED	SIGN	MODERATED
1	DOORS + WINDOWS	12			
2	ELECTRICAL	10			
3	FIXTURES	9½			
4	HATCHING	3			
5	LABELS	4½			
SUBTOTAL		39			
SOUTH ELEVATION					
1	ROOF + RWDP	10½			
2	WALLS + FFL	5½			
3	DOOR + WINDOW	7½			
4	LABELS	1½			
SUBTOTAL		25			
DETAILED SECTION					
1	ROOF DETAIL	13			
2	WALL	8			
3	DOOR + CUPBOARD	4			
4	HATCHING	4			
5	LABELS	1			
SUBTOTAL		30			
TOTAL		94			
PENALTIES (+)					
GRAND TOTAL					
EXAMINATION NUMBER					
EXAMINATION NUMBER					

